

Aire du carré et rectangle

Calcul l'aire de ces formes.

1)


8 cm



10 cm

2)

7 cm



8 cm

3)


9 cm



3 cm

4)

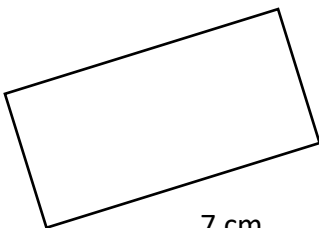
5 cm



12 cm

5)

4 cm



7 cm

6)

5 cm

